


Name: \_\_\_\_\_


Find the total cost of the items shown.  
Show your work.




Total cost: \_\_\_\_\_



Total cost: \_\_\_\_\_



Total cost: \_\_\_\_\_



Total cost: \_\_\_\_\_

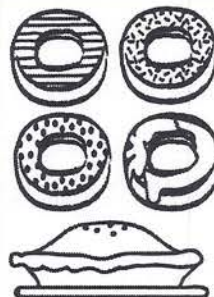
# Village Bakery

## Prices

Chocolate Chip Cookies.....	3 for 99¢
Donuts.....	2 for 78¢
Pretzels.....	97¢ ea.
Cupcakes.....	\$1.06 ea.
Pies.....	\$7.25 ea.
Cakes.....	\$8.98 ea.



Total cost: \_\_\_\_\_



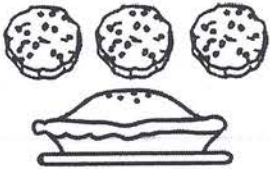
Total cost: \_\_\_\_\_

# ANSWER KEY


Find the total cost of the items shown.  
Show your work.




Total cost: \$2.03



Total cost: \$8.24



Total cost: \$3.02



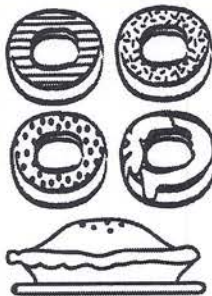
Total cost: \$17.01

## Village Bakery Prices

Chocolate Chip Cookies.....	3 for 99¢
Donuts.....	2 for 78¢
Pretzels.....	97¢ ea.
Cupcakes.....	\$1.06 ea.
Pies.....	\$7.25 ea.
Cakes.....	\$8.98 ea.



Total cost: \$9.76



Total cost: \$8.81